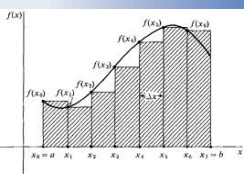


$$f'(x) = \lim_{h \rightarrow 0} \frac{f(x+h) - f(x)}{h}$$

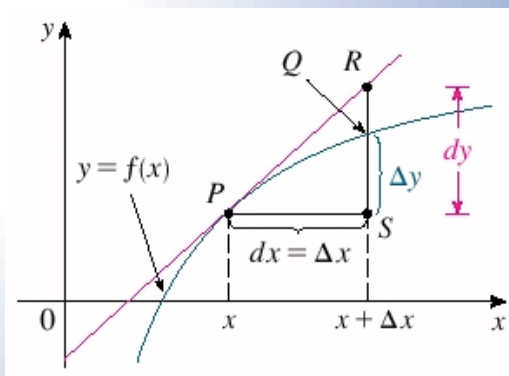
$$\frac{d}{dx} \int_a^x f(t) dt = f(x)$$



$$\lim_{\max \Delta x_i \rightarrow 0} \sum_{i=1}^n f(x_i) \Delta x_i = \int_a^b f(x) dx$$

$$\int_a^b f(x) dx = F(b) - F(a)$$

Differentials and Approximations



15.5B Differentials

Differentials and Approximations

We have seen the notation dy/dx and we've never separated the symbols. Now, we'll give meaning to dy and dx as separate entities.

We know $\lim_{\Delta x \rightarrow 0} \frac{f(x_0 + \Delta x) - f(x_0)}{\Delta x} = f'(x_0)$ gives the derivative (slope) of the function $f(x)$ at $x = x_0$.

If Δx is really small, then $\frac{f(x_0 + \Delta x) - f(x_0)}{\Delta x} \approx f'(x_0)$ *approximately true*

and $f(x_0 + \Delta x) - f(x) \approx f'(x_0)\Delta x$

Differentials

Let $y = f(x)$ be a differentiable function of x . Δx is an arbitrary increment of x .

$dx = \Delta x$ (dx is called a differential of x .)

Δy is actual change in y as x goes from x to $x + \Delta x$.

i.e. $\Delta y = f(x + \Delta x) - f(x)$

$dy = f'(x)dx$ (dy is called the differential of y .)

(a small increment of x)

$$\frac{dy}{dx} = f'(x)$$

$$dy = f'(x) dx$$

$$\Delta y \approx dy$$

15.5B Differentials

EX 1 Find dy .

a) $y = 4x^3 - 2x + 5$

$$\frac{dy}{dx} = 12x^2 - 2 \Rightarrow \boxed{dy = (12x^2 - 2) dx}$$

b) $y = 2\sqrt{x^4 + 6x} = 2(x^4 + 6x)^{1/2}$

$$\frac{dy}{dx} = 2\left(\frac{1}{2}\right)(x^4 + 6x)^{-1/2}(4x^3 + 6)$$

c) $y = \cos(x^3 - 5x + 11)$

$$\boxed{dy = \frac{(4x^3 + 6)}{\sqrt{x^4 + 6x}} dx}$$

$$\frac{dy}{dx} = -\sin(x^3 - 5x + 11)(3x^2 - 5) \Rightarrow$$

$$\boxed{dy = -\sin(x^3 - 5x + 11)(3x^2 - 5) dx}$$

d) $y = (x^{10} + \sqrt{\sin(2x)})^2$

$$\frac{dy}{dx} = 2(x^{10} + \sqrt{\sin(2x)})' \left(10x^9 + \frac{\cos(2x)(2)}{2\sqrt{\sin(2x)}} \right)$$

$$\boxed{dy = 2(x^{10} + \sqrt{\sin(2x)}) \left(10x^9 + \frac{\cos(2x)}{\sqrt{\sin(2x)}} \right) dx}$$

15.5B Differentials

Differentials can be used for approximations.

$$\text{If } f(x+\Delta x) - f(x) \approx f'(x) \Delta x,$$

$$\text{then } f(x+\Delta x) \approx f(x) + f'(x) \Delta x.$$

EX 2 Find a good approximation for $\sqrt{9.2}$ without using a calculator.

$$\text{Let } f(x) = \sqrt{x}, \quad x = 9$$

$$\Delta x = dx = 0.2$$

$$f(x+\Delta x) \approx f(x) + f'(x)\Delta x$$

$$x + \Delta x = 9 + 0.2 = 9.2$$

$$f(9.2) \approx f(9) + f'(9)(0.2)$$

$$\approx \sqrt{9} + \frac{1}{2\sqrt{9}}(0.2)$$

$$= 3 + \frac{1}{6}(0.2)$$

$$= 3 + \frac{0.1}{3}$$


$$= 3 + 0.0\bar{3} = 3.0\bar{3}$$

$$\Rightarrow \boxed{\sqrt{9.2} \approx 3.0\bar{3}}$$

$$f'(x) = \frac{1}{2\sqrt{x}}$$

15.5B Differentials

- EX 3 Use differentials to approximate the increase in the surface area of a soap bubble when its radius increases from 4 inches to 4.1 inches.



$$SA = f(r) = 4\pi r^2, \quad r = 4 \text{ in}, \quad \Delta r = dr = 0.1 \text{ in}$$


want to approximate Δf .

(Δf = actual change in SA, $f(4.1) - f(4)$)

$$\Delta f \approx df = f'(r)dr, \quad f'(r) = 8\pi r$$

$$\Delta f \approx 8\pi(4)(0.1) = 3.2\pi \approx \boxed{10.05 \text{ in}^2}$$

- EX 4 The height of a cylinder is measured as 12 cm with a possible error of ± 0.1 cm. Evaluate the volume of the cylinder with radius 4 cm and give an estimate for the possible error in this value.



$$V = \pi r^2 h = 16\pi h, \quad dh = \pm 0.1 \text{ cm}$$

$$V(h) = 16\pi h \quad V(12) = 16\pi(12)$$

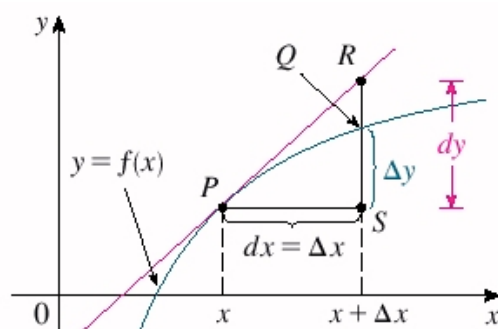
$$\Delta V \approx dV = V'(h)dh = 16\pi(\pm 0.1)$$

$$dV = \pm 1.6\pi \approx 5.03 \text{ cm}^3$$

$$V = 192\pi \approx 603.2 \text{ cm}^3$$

$$\Rightarrow V \approx 603.2 \pm 5.03 \text{ cm}^3$$

15.5B Differentials



if Δx very small,
 $dy \approx \Delta y$.

orig. x-value
+ a little bit of change