
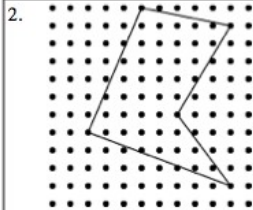

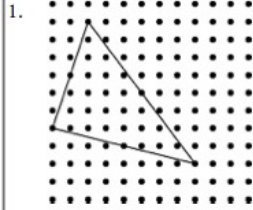


Name _____


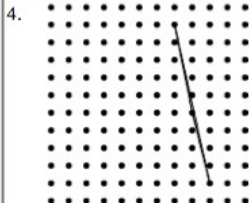

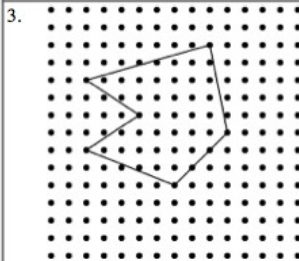
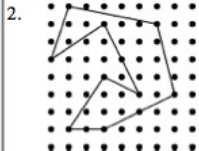
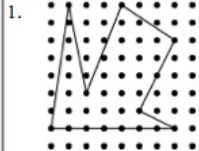


Date _____
(Answer ID # 1-6594729)

Redraw each shape so that each side is one and two-thirds as long.



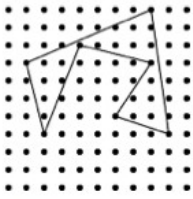
Redraw each shape so that each side is three-fourths as long.



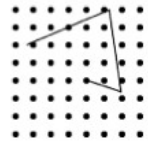
Complete the shape on the right.

1.

(a)



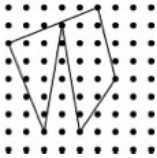
(b)



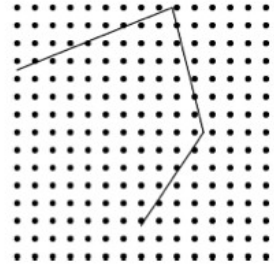
Each side in shape (b) is _____ as large as the sides in shape (a).

2.

(a)




(b)



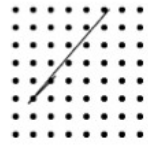
Each side in shape (b) is _____ as large as the sides in shape (a).

3.

(a)



(b)



Each side in shape (b) is _____ as large as the sides in shape (a).