

3.7 Transformations of Graphs

★ see table page 182 in book

Transformations base graph $f(x)$

shift	reflection	stretch/shrink
$h(x) = f(x) \pm c$	$g(x) = -f(x)$	$k(x) = cf(x) \quad c \in \mathbb{R}$
$h(x) = f(x \pm c)$	$g(x) = f(-x)$	$k(x) = f(cx) \quad c \in \mathbb{R}$

Ex 1 Describe transformation of $f(x) = -(x-2)^2 + 3$ compared to base graph of $y = x^2$.
Sketch graph of $f(x)$.

3.7 (cont)


Ex 2 Describe x-form and sketch graph.

(a) $g(x) = -2|x-3| + 1$


(b) $h(x) = 4(x+2)^3 - 3$

Base graphs


$y = x^2$




$y = |x|$



$y = x^3$

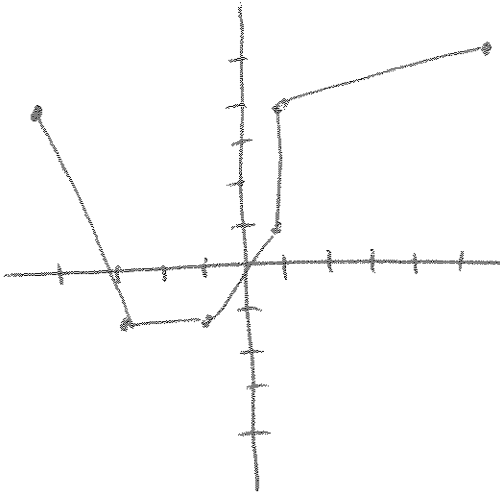


$y = \sqrt{x}$



3.7 (cont)

Ex 3 Given this graph, sketch the indicated transformed graph.



(a) $f(-x) + 1$

(b) $f(x+1)$

(c) $-f(x) + 1$

3.8 Combination of Functions †

4.1 Inverse Functions

Fns

• Addition $(f+g)(x) = f(x) + g(x)$

• Subtraction $(f-g)(x) = f(x) - g(x)$

• Multiplication $(fg)(x) = f(x)g(x)$

• Division $\left(\frac{f}{g}\right)(x) = \frac{f(x)}{g(x)}$ (as long as $g(x) \neq 0$)

• Composition $(f \circ g)(x) = f(g(x))$ Read "f of g of x"

Ex 1 Given $f(x) = 2x + 5$ $g(x) = \frac{1}{x^3}$, find

(a) $(f \circ g)(x)$

(b) $(f+g)(1)$

(c) $(g \circ f)(1)$

(d) $\left(\frac{f}{g}\right)(x)$

3.8 & 4.1 (cont)

Ex 2 Given $f(x) = x^2 - 1$ $g(x) = \frac{x}{2}$ $h(x) = \sqrt{x-1}$, find

(a) $(h \circ f)(x)$

(d) $g(h(x))$

(b) $(g-h)(1)$

(e) $h(f(g(x)))$

(c) $(hf)(3)$

3.8 & 4.1 (cont)

Inverse Fns

An inverse fn basically "undoes" what the original fn did to the input x

notation: $f^{-1}(x)$ read "f inverse of x"

$$f^{-1}(f(x)) = f(f^{-1}(x)) = x$$

Ex 3 Are $f(x) = 5x - 1$ and $g(x) = \frac{x+1}{5}$ inverse fns?

Does every fn have an inverse? No!

A fn that has an inverse passes the horizontal line test (w/ its graph)

one to one: every input has exactly one output
and every output has exactly one input.

3.8 & 4.1 (cont)

★ Inverse fn graph is mirror image of original fn across line $y=x$

Ex 4

Does $y=x^2$ have an inverse fn?

Can we restrict its domain so it does have an inverse?

Strategy to find inverse

① "Pants" Technique

Ex 5 Find inverse of $f(x)=4(x-1)^3$

② Standard Technique

3.8 & 4.1 (cont)

Ex 6 Find inverse of $f(x) = \sqrt[3]{\frac{x+1}{2x+3}}$

Ex 7 Are $f(x) = 2\sqrt{x} - 1$ and $g(x) = \frac{1}{4}(x+1)^2$
inverses of each other?