

## 12.1 Functions (Fns) of Two or More Variables

Ex1 let  $f(x, y, z) = \sqrt{x \cos y} + z^2$

(a) what is the domain?

(b) what dimension space does the graph of this fn live in?

(c) Find  $f(2, \pi/3, -1)$ .

Ex2 Find domain of  $f(x, y, z) = z \ln(xy)$

12.1 (cont)

Ex 3 Sketch the level curves ( $z=k$  where  $k=0,1,2,3$ )  
for  $z=f(x,y) = 2-x-y^2$

Ex 4 Sketch the graph of  $z=f(x,y) = x^2 + y^2 - 4$ .

## 12.2 Partial Derivatives

Ex 1 Find  $f_x$  and  $f_y$   
given  $f(x,y) = \ln(x^2 - y^2)$

(wrt = with respect to)

Given  $z = f(x,y)$

The partial derivative of  $z$   
wrt  $x$  is

$$f_x(x,y) = z_x = \frac{\partial z}{\partial x} = \frac{\partial f(x,y)}{\partial x}$$

(likewise for partial wrt  $y$ )

$$f_y(x,y) = z_y = \frac{\partial z}{\partial y} = \frac{\partial f(x,y)}{\partial y}$$

Ex 2 Find the four second  
order partial derivatives for  
 $f(x,y) = 2x^3 \cos(4y)$

For  $f_{xyy}$ , work "inside to  
outside" for this notation.

$$f_x \xrightarrow{\text{then}} (f_x)_y = f_{xy}$$

$$\xrightarrow{\text{then}} (f_{xy})_y = f_{xyy}$$

Note:

$$f_{xyy} = \frac{\partial^3 f}{\partial x \partial y^2}$$

(in this notation, it's  
from right to left  
in the denominator)

## 12.2 (cont)

Ex 3 Imagine you are on the surface

$$z = \frac{5\sqrt{16-x^2}}{4} \text{ at pt } (2, 3, \frac{5\sqrt{3}}{2}). \text{ Find the slope}$$

of the tangent line to this pt that lies in the  $x=2$  plane (ie. the tangent to the intersection curve of the surface w/ the  $x=2$  plane). Repeat for the tangent line to the pt that lies in the  $y=3$  plane.

(i) what type of surface is this? sketch it.

(ii) slope at pt in  $x=2$  plane

(iii) slope at pt in  $y=3$  plane

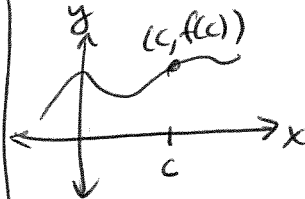
# 12.3 Limits & Continuity

Ex 1 Find the limit or justify that it DNE.

(a)  $\lim_{(x,y) \rightarrow (0,0)} \frac{x^4 - y^4}{x^2 + y^2}$

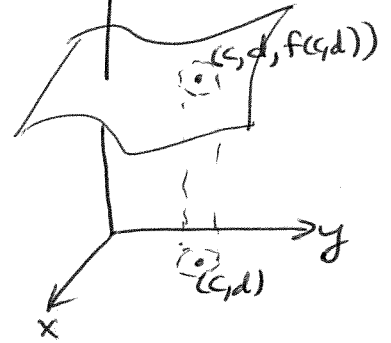
(b)  $\lim_{(x,y) \rightarrow (0,0)} \frac{xy^2}{x^2 + y^4}$

2-d



Does  $\lim_{x \rightarrow c} f(x)$  exist?  
approach from left and right to see.

3-d



Does  $\lim_{(x,y) \rightarrow (c,d)} f(x,y)$  exist?  
approach from all directions in disk around (c, d)

Strategies to show limit exists:

- ① plug in numbers, everything is fine
- ② algebraic manipulation
  - factoring / dividing out
  - use trig identities
- ③ change to polar coords if  $(x,y) \rightarrow (0,0) \Rightarrow r \rightarrow 0$ .

Strategies to show limit DNE:

- ① show limit is different if approach from different paths
- ② switch to polar coords and limit DNE

## 12.3 (cont)

### Ex 1 (cont)

$$(c) \lim_{(x,y) \rightarrow (0,0)} \left( xy \frac{x^2 - y^2}{x^2 + y^2} \right)$$

A fn  $z = f(x, y)$   
is continuous  
at  $(a, b)$  if

$$f(a, b) = \lim_{(x,y) \rightarrow (a,b)} f(x, y)$$

i.e. ① limit exists

② fn value is  
defined

③ they are the  
same value

Ex 2 Describe the largest set  $S$  on which  $f$  is continuous.

$$(a) f(x, y) = \frac{1}{\sqrt{1+x+y}}$$

$$(b) f(x, y, z) = \ln(4 - x^2 - y^2 - z^2)$$

## 12.4 Differentiability

Ex 1 Find the gradient  
 $\nabla f$  of  $f(x,y) = 4xe^{xy}$ .

Ex 2 Find the gradient of  
 $f(x,y) = \frac{x^2}{y}$  at input pt  
(2,-1). Then find eqn of tangent  
plane at this pt.

Let  $z = f(x,y)$  be a fn  
and  $(a,b)$  be a pt in the  
domain.

Gradient of  $f$  at pt  $(a,b)$ :  
 $\nabla f(a,b) = \langle f_x(a,b), f_y(a,b) \rangle$   
(a vector)

Tangent plane to  $z = f(x,y)$   
at pt  $(a,b)$ :

$$z = f(a,b) - \nabla f(a,b) \cdot \langle x-a, y-b \rangle$$

Qns

- ① Does the gradient  
always exist?
- ② Does the tangent plane  
at a pt on the surface  
always exist?
- ③ How is the gradient related  
to differentiability?

## 12.4 (cont)

Ex 3 Find the eqn of the tangent "hyperplane"  
to  $w = f(x, y, z) = 2y \cos(2\pi x) + 4x \cos(\pi y) + xz$  at input  
pt  $(1, \frac{1}{2}, 3)$



## 12.5 Directional Derivatives

Ex 1 Find the directional derivative of  $f(x,y) = e^{-xy}$  at the input pt  $(1,-1)$  in the direction of

$$\vec{u} = -\hat{i} + \sqrt{3}\hat{j}.$$

(Note: Is  $\vec{u}$  a unit vector?)

let  $z = f(x,y)$  be a fn,  $(a,b)$  a pt in the domain (i.e. an input pt) and  $\vec{u}$  a unit vector (2-d).

<sup>3-d</sup>  
Thm If  $f$  is \_\_\_\_\_ then  $f$  has a directional derivative at  $(a,b)$  in the direction of  $\hat{u} = u_1\hat{i} + u_2\hat{j}$ .

$$\begin{aligned} D_{\vec{u}} f(a,b) &= \vec{u} \cdot \nabla f(a,b) \\ &= \langle u_1, u_2 \rangle \cdot \langle f_x(a,b), f_y(a,b) \rangle \\ &= u_1 f_x(a,b) + u_2 f_y(a,b) \end{aligned}$$

(this returns a number / scalar)

4-d version!

$$\begin{aligned} D_{\vec{u}} f(a,b,c) &= \vec{u} \cdot \nabla f(a,b,c) \\ &= \langle u_1, u_2, u_3 \rangle \cdot \langle f_x(a,b,c), f_y(a,b,c), f_z(a,b,c) \rangle \end{aligned}$$

## 12.5 (cont)

Ex 2 Find a unit vector in the direction in which  $f(x,y,z) = 4xyz^2$  decreases most rapidly at pt  $(2, -1, 1)$ . What is the rate of change in this direction?

Thm

At input pt  $(a,b)$ , the fn  $z = f(x,y)$  increases most rapidly in the direction

at a rate \_\_\_\_\_

and decreases most rapidly in the direction

at a rate \_\_\_\_\_.

Ex 3 Find the directional derivative of  $f(x,y) = e^{-x} \cos y$  at  $(0, \pi/3)$  in the direction toward the origin.

## 12.6 Chain Rule(s)

Ex 1 Find  $\frac{dw}{dt}$  using a chain rule.

$$w = xy + yz + xz$$

$$x = t^2, y = 1 - t^2, z = 1 - t$$

Ex 2 Find  $\frac{\partial w}{\partial t}$  using a chain rule.

$$w = x^2 - y \ln x$$

$$x = \frac{s}{t}, y = s^2 t$$

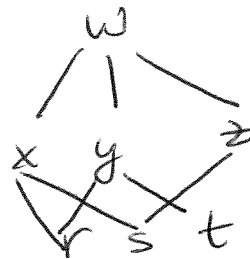
$z = f(x, y)$   
 let  $x = x(s, t), y = y(s, t)$   
 w/ first partial derivatives at  $(x(s, t), y(s, t))$ . Then  $z$  has first partial derivatives.

$$\frac{\partial z}{\partial s} = \frac{\partial z}{\partial x} \frac{\partial x}{\partial s} + \frac{\partial z}{\partial y} \frac{\partial y}{\partial s}$$

$$\frac{\partial z}{\partial t} = \frac{\partial z}{\partial x} \frac{\partial x}{\partial t} + \frac{\partial z}{\partial y} \frac{\partial y}{\partial t}$$



~~Q1~~ If the flow chart is



Find:  $\frac{\partial w}{\partial r} =$

$$\frac{\partial w}{\partial s} =$$

$$\frac{\partial w}{\partial t} =$$

## 12.6 (cont)

Ex 3 If  $w = x^2y + z^2$ ,

$$x = \rho \cos \theta \sin \varphi$$

$$y = \rho \sin \theta \sin \varphi$$

$$z = \rho \cos \varphi$$

find  $\frac{dw}{d\theta} \Big|_{\rho=2, \theta=\pi, \varphi=\pi/2}$

Ex 4 Airplanes A & B depart from point P at the same time. Plane A flies due east & plane B flies  $N50^\circ E$ . At a certain time, plane A is 200 miles from P flying 450 mph and plane B is 150 miles from P flying 400 mph. How fast are they separating at that instant?

## 12.7 Tangent Planes

Ex1 Find eqn of tangent plane to  $x^2 + y^2 - z^2 = 4$  at  $(2, 1, 1)$ .

Ex2 Find a pt on the surface  $z = 2x^2 + 3y^2$  where the tangent plane is parallel to the plane  $8x - 3y - z = 0$ .

Defn

Let  $F(x, y, z) = k$  be a surface.  
 $P_0 = (x_0, y_0, z_0)$  be a pt on  $F$ .

If \_\_\_\_\_

and \_\_\_\_\_

then the tangent plane to  $F$  at  $P_0$  exists.

It is the plane  $\perp$  to \_\_\_\_\_

and passes through \_\_\_\_\_

Eqn of Tangent Plane

$$\nabla F(x_0, y_0, z_0) \cdot \langle x - x_0, y - y_0, z - z_0 \rangle = 0$$

## 12.7 (cont)

Ex 3 Use differentials to approximate the change in  $z = \tan^{-1}(xy)$  from  $P(2, -0.5)$  to  $Q(-2.03, -0.51)$ . Then find  $\Delta z$  (the actual change).

Ex 4 An object's weight in air is 36 lbs =  $A$  and its weight in water is  $W = 20$  lbs, with a possible error in each measurement of 0.02 lbs. Find (by approximating) the maximum possible error in calculating its specific gravity from  $S(A, W) = \frac{A}{A - W}$ .

Let  $z = f(x, y)$  be a differentiable fn.

Total differential of  $f = dz$

$$dz = \nabla f \cdot \langle dx, dy \rangle$$

(this  $dz$  is the approximate change in  $z$ )

the actual change in  $z$  is

$$\Delta z = z_2 - z_1$$

(i.e. the difference in the  $z$ -values)

## 12.8 Maxima and Minima

Ex 1 What is the boundary of  
 $\{(x,y) : 1 < x \leq 4\}$

Ex 2 For  $f(x,y) = x^2 + a^2 - 2ax \cos y$   
 $y \in [-\pi, \pi]$ , find all critical pts.  
Determine if they are min, max or saddle pts. (Assume  $a$  is fixed.) (more space on next page)

Vocab For fn  $z = f(x,y)$

① global max:

② global min:

③ local max:

④ local min:

Critical pts:

- ① stationary pts
- ② singular pts
- ③ bndry pts

## 12.8 (cont)

### Ex 2 (cont)

$z = f(x, y)$   
Strategy to find max/min:

① Find all  $(x, y)$  pts  
such that  $\nabla f(x, y) = \vec{0}$ .

② let  $D = f_{xx}(x, y)f_{yy}(x, y) - f_{xy}^2(x, y)$

If (a)  $D > 0$  and  $f_{xx}(x, y) < 0$ ,  
 $f(x, y)$  is local max. value

(b)  $D > 0$  and  $f_{xx}(x, y) > 0$ ,  
 $f(x, y)$  is local min. value

(c)  $D < 0$ ,  $(x, y, f(x, y))$  is  
a saddle pt

(d)  $D = 0$ , test is  
inconclusive.

③ Determine if any  
boundary pt gives  
min or max. Typically,  
we have to parameterize  
boundary & then  
reduce to a Calc I  
type of min/max  
problem to solve.



12.8 (cont)

Ex 3 Find the min + max values of

$z = y^2 - x^2$  (hyperbolic paraboloid - like a Pringles chip)

on the closed triangle w/ vertices  $(0,0)$ ,  $(1,2)$   
and  $(2,-2)$ .

12.8 (cont)

Ex 4 (Setup this problem & take home to solve.)

Find the pt on the plane  $x+2y+3z=12$  that is closest to the origin. What is the minimum distance?

## 12.9 Lagrange Multipliers

Ex1 Find the minimum  
of  $f(x,y) = x^2 + 4xy + y^2$   
subject to constraint  
 $x - y - 6 = 0$ .

Given fn  $z = f(x,y)$   
WANT pts that  
produce global max/min  
and satisfy an additional  
constraint / boundary

$$g(x,y) = 0.$$

To find these max/min  
pts: solve

$$\textcircled{1} \nabla f = \lambda \nabla g$$

$$\text{and } \textcircled{2} g(x,y) = 0$$

simultaneously.

---

Note: we can easily  
extend this to fns  
of more variables  
than two.

12.9 (cont)

Ex 2 Use Lagrange method to solve:

(a) find min & max values for  $f(x,y) = x^2 - y^2 - 1$  on

$$S = \{(x,y) \mid x^2 + y^2 \leq 1\}$$

(Qn: can we use only Lagrange method here? why or why not?)

12.9 (cont)

Ex 2 (cont)

(b) Find 3d vector of length 9 with the largest possible sum of its components.

## 12.9 (cont)

Ex 3 Find the pt on the plane  $x+2y+3z=12$

that is closest to the origin. (This is same problem as 12.8 Ex 4 notes, but this time, see how much faster it is to solve using Lagrange method. 😊)